



Family Circle

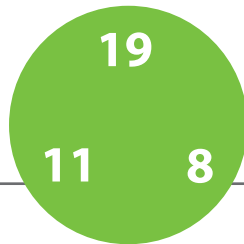
Each circle has three numbers that make up a **fact family**.
Add and subtract using each fact family to fill in the blanks.




$$\begin{array}{r} 9 + 8 = 17 \\ 8 + 9 = 17 \\ 17 - 8 = 9 \\ 17 - 9 = 8 \end{array}$$



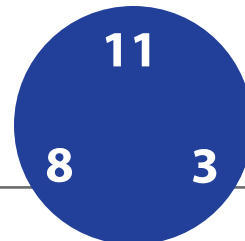
$$\begin{array}{r} + \quad = \\ + \quad = \\ - \quad = \\ - \quad = \end{array}$$




$$\begin{array}{r} + \quad = \\ + \quad = \\ - \quad = \\ - \quad = \end{array}$$




$$\begin{array}{r} + \quad = \\ + \quad = \\ - \quad = \\ - \quad = \end{array}$$



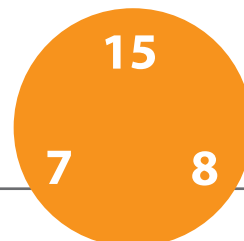
$$\begin{array}{r} + \quad = \\ + \quad = \\ - \quad = \\ - \quad = \end{array}$$



$$\begin{array}{r} + \quad = \\ + \quad = \\ - \quad = \\ - \quad = \end{array}$$



$$\begin{array}{r} + \quad = \\ + \quad = \\ - \quad = \\ - \quad = \end{array}$$



$$\begin{array}{r} + \quad = \\ + \quad = \\ - \quad = \\ - \quad = \end{array}$$