


# Estimating Length


Estimate the length of each object.  
Circle the answer that gives the best estimate.

\*\*Remember: 1 foot = 12 inches



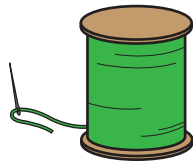
6 feet

6 inches




3 feet

3 inches



2 feet

2 inches




15 feet

15 inches



5 feet

5 inches



4 feet

4 inches