


Name: \_\_\_\_\_

Date: \_\_\_\_\_


## Equal Shares

*Draw lines to divide the shapes into equal shares.*


1. Divide the square into **4** equal shares.



2. Divide the circle into **6** equal shares.



3. Divide the rectangle into **3** equal shares.



4. Divide the trapezoid into **2** equal shares.

