


Name: _____


Date: _____


Equal Groups Smoothies





Max and Sana are buying lots of fruit to make smoothies. Look at the arrays of fruit on the left, then fill in the blanks on the right to find out how much of each they will buy.





$$\underline{\quad} + \underline{\quad} + \underline{\quad} = \underline{\quad}$$
$$6 \times 3 = \underline{\quad}$$






$$\underline{\quad} + 6 = \underline{\quad}$$
$$\underline{\quad} \times \underline{\quad} = \underline{\quad}$$




$$\underline{\quad} + \underline{\quad} + \underline{\quad} = 15$$
$$\underline{\quad} \times \underline{\quad} = \underline{\quad}$$




$$\underline{\quad} + \underline{\quad} + \underline{\quad} + \underline{\quad} = \underline{\quad}$$
$$\underline{\quad} \times \underline{\quad} = \underline{\quad}$$




$$\underline{\quad} + \underline{\quad} + \underline{\quad} + \underline{\quad} = \underline{\quad}$$
$$4 \times \underline{\quad} = 24$$
