







Name _____

Date _____

USING ELECTION DATA

In democratic societies, people vote for leaders that best represent their opinions. These votes are counted and tallied together. The candidate who has the most votes is elected as a leader. This voting process is called an **election**.

Use the tally chart below to answer the questions.

candidate	tally	total
 Eva Kalina		12
 Ben Kerman		16
 Mac Fitzgerald		20

- How many votes does Eva Kalina have? _____
- How many people voted for Mac Fitzgerald? _____
- Who won the election? _____
- Who won second place? _____
- How many more votes does Eva Kalina need to win? _____