

LET'S TRAVEL TO EGYPT!

I. MATCH THE LANDMARKS USING THE FOLLOWING CHOICES:

- | | |
|-------------------------|----------------------------|
| _____ ABU SIMBEL | _____ THE PYRAMIDS OF GIZA |
| _____ TEMPLES OF KARNAK | _____ LUXOR TEMPLE |
| _____ SIWA OASIS | _____ MOSQUE OF IBN TULUN |



A




D



C



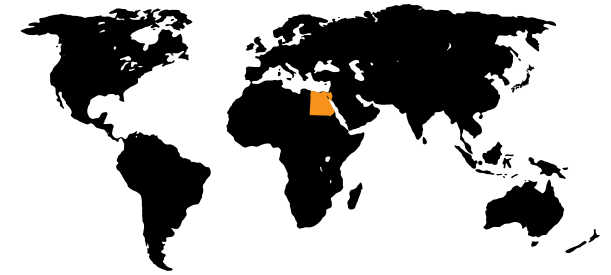
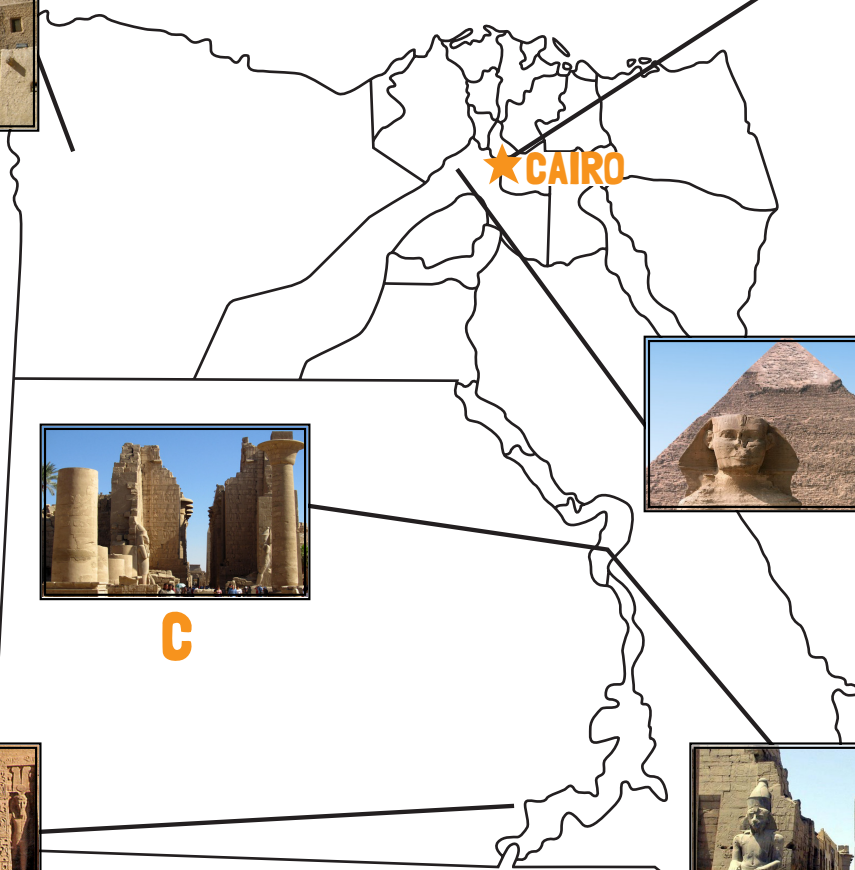
E



B



F



II. CIRCLE THE CORRECT ANSWER:

1. WHOSE PYRAMID DOES THE SPHINX GUARD?

- | | |
|------------------|-------------------|
| KHUFU'S PYRAMID | AMUN RE'S PYRAMID |
| KHAFRE'S PYRAMID | SAKHMET'S PYRAMID |

2. EGYPTIANS WERE ABLE TO CONTROL THE NILE RIVER BY BUILDING WHAT?

- | | |
|----------|-------------------|
| PYRAMIDS | CLAY HOUSES |
| MUMMIES | IRRIGATION CANALS |

3. USED TO MAKE BREAD AND BEER, WHAT WAS THE MAJOR CROP OF ANCIENT EGYPT?

- | | |
|--------|--------|
| RICE | BARLEY |
| GRAPES | SALT |

- I. ANSWERS:
 A. SIWA OASIS
 B. ABU SIMBEL
 C. TEMPLES OF KARNAK
 D. MOSQUE OF IBN TULUN
 E. THE PYRAMIDS OF GIZA
 F. LUXOR TEMPLE
- II. ANSWERS:
 1. KHAFRE'S PYRAMID
 2. IRRIGATION CANALS
 3. BARLEY