





Zoo Subtraction

Count and cross out the animals according to the directions. Then write down the numbers and subtract. See the example.

	How many penguins are there?	3
	Cross out 1 penguin.	$- 1$
	How many penguins are left?	2
	How many hedgehogs are there?	
	Cross out 6 hedgehogs.	$-$
	How many hedgehogs are left?	
	How many snakes are there?	
	Cross out 3 snakes.	$-$
	How many snakes are left?	
	How many owls are there?	
	Cross out 5 owls.	$-$
	How many owls are left?	