





Animal Subtraction

Count and cross out the animals according to the directions. Then write down the numbers and subtract. See the example.

| | | |
|---|-------------------------------------|------------|
|  | <p>How many chicks are there?</p> | <p>5</p> |
| | <p>Cross out 4 chicks.</p> | <p>- 4</p> |
| | <p>How many chicks are left?</p> | <p>1</p> |
|  | <p>How many toads are there?</p> | |
| | <p>Cross out 2 toads</p> | <p>—</p> |
| | <p>How many toads are left?</p> | <p>—</p> |
|  | <p>How many fish are there?</p> | |
| | <p>Cross out 3 fish.</p> | <p>—</p> |
| | <p>How many fish are left?</p> | <p>—</p> |
|  | <p>How many ladybugs are there?</p> | |
| | <p>Cross out 5 ladybugs.</p> | <p>—</p> |
| | <p>How many ladybugs are left?</p> | <p>—</p> |