


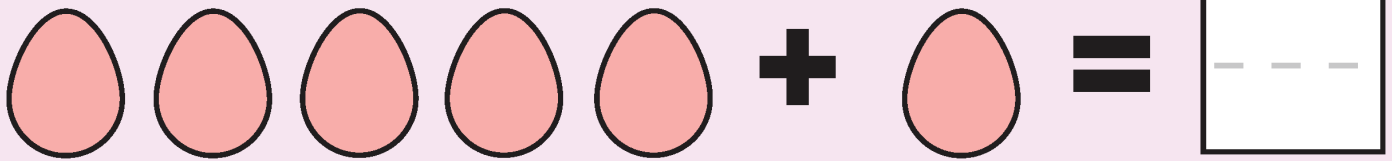




Easter Addition

Add the Easter items. How many are there?
Write the total in the box.





Easter Addition



Help count the bunnies and chicks. How many are there?
Write the total in the box.

4 yellow chicks + 6 yellow chicks =


5 brown bunnies + 3 brown bunnies =

4 yellow chicks + 6 yellow chicks =


6 white bunnies + 3 white bunnies =

Easter Addition


Help count the Easter items. How many are there?
Write the total in the box.




A blue rectangular box on the left contains four pink eggs arranged in a 2x2 grid. To its right is a plus sign. Further right is another blue rectangular box containing eight pink eggs arranged in two rows of four. To the right of this is an equals sign, followed by a square box with a dashed line for writing the total.



A green rectangular box on the left contains five white flowers with yellow centers, arranged in two rows of two and one flower centered below. To its right is a plus sign. Further right is another green rectangular box containing fifteen white flowers with yellow centers, arranged in three rows of five. To the right of this is an equals sign, followed by a square box with a dashed line for writing the total.



A blue rectangular box on the left contains one brown rabbit's head. To its right is a plus sign. Further right is another blue rectangular box containing two brown rabbit heads. To the right of this is an equals sign, followed by a square box with a dashed line for writing the total.



A green rectangular box on the left contains two colorful butterflies. To its right is a plus sign. Further right is another green rectangular box containing six colorful butterflies arranged in two rows of three. To the right of this is an equals sign, followed by a square box with a dashed line for writing the total.