


Name: _____

Date: _____


Draw the Array!

Directions: For each problem below, draw the array that represents it.
Then solve for the answer.


1. $2 \times 2 =$ _____




2. $2 \times 3 =$ _____




3. $3 \times 4 =$ _____



4. $3 \times 2 =$ _____



5. $4 \times 2 =$ _____



6. $4 \times 3 =$ _____

