



Dividing Shapes Worksheet


Divide each shape into four equal quarters. Make each one unique.




I divided this _____ into ____ equal _____.
(name of shape) (number) (fraction)



I divided this _____ into ____ equal _____.
(name of shape) (number) (fraction)



I divided this _____ into ____ equal _____.
(name of shape) (number) (fraction)



I divided this _____ into ____ equal _____.
(name of shape) (number) (fraction)



I divided this _____ into ____ equal _____.
(name of shape) (number) (fraction)



I divided this _____ into ____ equal _____.
(name of shape) (number) (fraction)