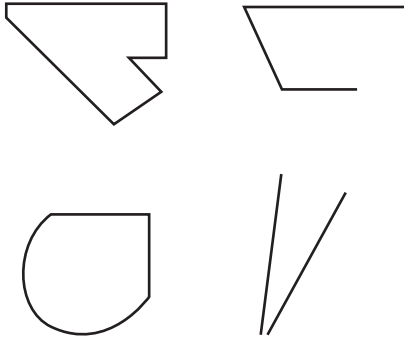


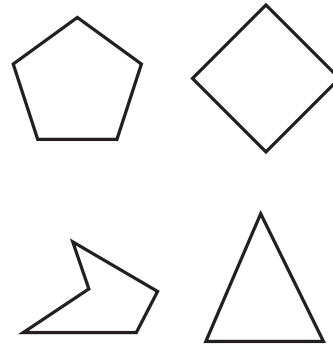
Describing Polygons

1. Circle the polygon.



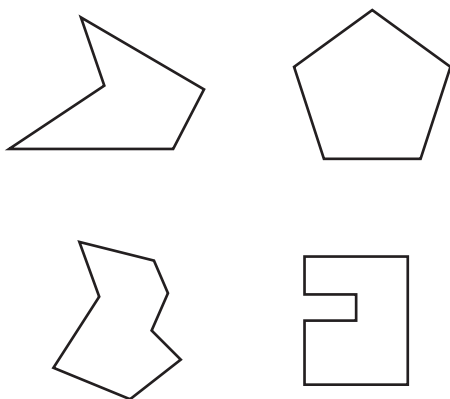
How do you know this shape is a polygon?

3. Circle the irregular pentagon.



How do you know this shape is an irregular pentagon?

2. Circle the regular pentagon.



How do you know this shape is a regular polygon?

4. Draw a regular and irregular pentagon below. Explain how they are similar and how they are different.

