



Decompose 11-19: Tens and Ones #1


First, circle 10 frogs. **Then**, count how many more frogs there are. **Last**, write an equation to match the picture.



$$\begin{array}{|c|} \hline 10 \\ \hline \end{array} + \begin{array}{|c|} \hline 5 \\ \hline \end{array} = \begin{array}{|c|} \hline 15 \\ \hline \end{array}$$



$$\begin{array}{|c|} \hline \\ \hline \end{array} + \begin{array}{|c|} \hline \\ \hline \end{array} = \begin{array}{|c|} \hline \\ \hline \end{array}$$



$$\begin{array}{|c|} \hline \\ \hline \end{array} + \begin{array}{|c|} \hline \\ \hline \end{array} = \begin{array}{|c|} \hline \\ \hline \end{array}$$