

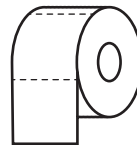
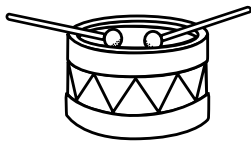




# Cylinders in Different Settings

A **cylinder** is a round 3-dimensional shape that:

- has two circular bases
- has one curved side



**Directions:** Circle the real-life examples of cylinders. Then categorize all the objects in the chart. Some objects can fit in more than one category. For an added challenge, name the item and the 3-D shape.



Where can you find the object?  
(Note: Some objects can fit in more than one category!)

**In the home:**

**In the classroom:**

**Outside:**