





# COUNT THE INSECTS

There are **12** insects.

How many butterflies?

How many bees?



Write each number in the box

Butterflies

Bees