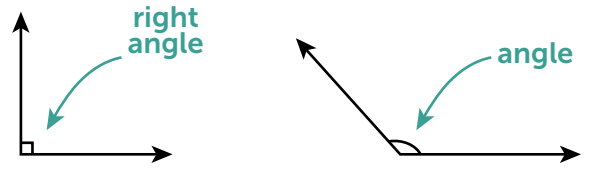


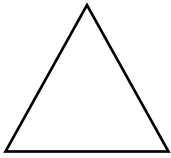
Counting Angles

What is an **angle**? An angle is formed when two lines meet. They are measured in degrees.



Directions: Circle the angles in the shapes below and record the total amount on the line. Then count the number of right angles and record the total amount on the line.

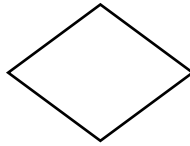
1.



Angles: _____

Right angles: _____

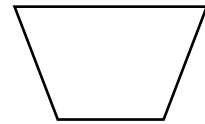
2.



Angles: _____

Right angles: _____


3.



Angles: _____

Right angles: _____

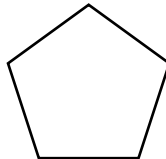
4.



Angles: _____

Right angles: _____

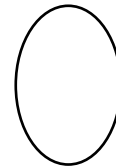
5.



Angles: _____

Right angles: _____

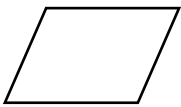
6.



Angles: _____

Right angles: _____

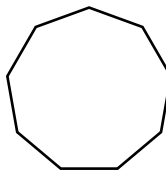
7.



Angles: _____

Right angles: _____

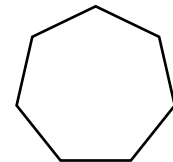
8.



Angles: _____

Right angles: _____

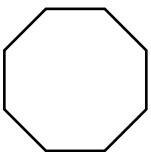
9.



Angles: _____

Right angles: _____


10.



Angles: _____

Right angles: _____

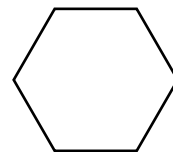
11.



Angles: _____

Right angles: _____

12.



Angles: _____

Right angles: _____