




Counting by 2s



Fill in the missing numbers to count by 2s.

1		3		5
	7		9	
11		13		15
	17		19	
21		23		25
	27		29	