




Addition Within 10: Tomatoes


Add. Use the pictures to help you. The first problem has been done for you.


$$\begin{array}{r} 1 \\ + 8 \\ \hline 9 \end{array}$$


$$\begin{array}{r} 2 \\ + 6 \\ \hline \end{array}$$


$$\begin{array}{r} 2 \\ + 5 \\ \hline \end{array}$$



$$\begin{array}{r} 3 \\ + 3 \\ \hline \end{array}$$



$$\begin{array}{r} 1 \\ + 5 \\ \hline \end{array}$$


$$\begin{array}{r} 4 \\ + 1 \\ \hline \end{array}$$


$$\begin{array}{r} 3 \\ + 5 \\ \hline \end{array}$$


$$\begin{array}{r} 3 \\ + 4 \\ \hline \end{array}$$



$$\begin{array}{r} 1 \\ + 7 \\ \hline \end{array}$$


$$\begin{array}{r} 6 \\ + 3 \\ \hline \end{array}$$


$$\begin{array}{r} 1 \\ + 2 \\ \hline \end{array}$$


$$\begin{array}{r} 4 \\ + 4 \\ \hline \end{array}$$


$$\begin{array}{r} 0 \\ + 4 \\ \hline \end{array}$$


$$\begin{array}{r} 7 \\ + 3 \\ \hline \end{array}$$


$$\begin{array}{r} 8 \\ + 1 \\ \hline \end{array}$$
