





Name _____

Date _____

Addition Within 10: Bananas

Add. Use the pictures to help you. The first problem has been done for you.

$$\begin{array}{r} 1 \\ + 7 \\ \hline 8 \end{array}$$





$$\begin{array}{r} 1 \\ + 8 \\ \hline \end{array}$$





$$\begin{array}{r} 5 \\ + 2 \\ \hline \end{array}$$





$$\begin{array}{r} 5 \\ + 1 \\ \hline \end{array}$$



$$\begin{array}{r} 2 \\ + 2 \\ \hline \end{array}$$



$$\begin{array}{r} 3 \\ + 2 \\ \hline \end{array}$$



$$\begin{array}{r} 2 \\ + 6 \\ \hline \end{array}$$



$$\begin{array}{r} 4 \\ + 4 \\ \hline \end{array}$$



$$\begin{array}{r} 5 \\ + 4 \\ \hline \end{array}$$





$$\begin{array}{r} 4 \\ + 3 \\ \hline \end{array}$$




$$\begin{array}{r} 3 \\ + 5 \\ \hline \end{array}$$



$$\begin{array}{r} 8 \\ + 2 \\ \hline \end{array}$$



$$\begin{array}{r} 1 \\ + 1 \\ \hline \end{array}$$



$$\begin{array}{r} 6 \\ + 0 \\ \hline \end{array}$$


$$\begin{array}{r} 7 \\ + 1 \\ \hline \end{array}$$

