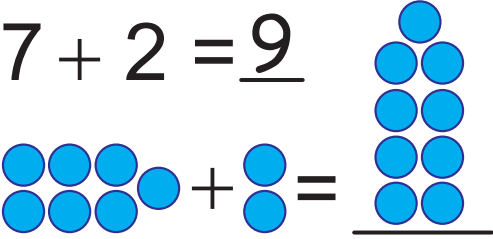









# Practice Your Addition, 1 to 10 - Grid #27

★ Add the two numbers together for each problem. Write your answer in the blank space. Then add up the shapes and draw the answer. See Example 1.

|   |  |
|---|--|
| <p>Example 1.</p> $7 + 2 = 9$            | <p>2.</p> $3 + 6 = \underline{\quad}$    |
| <p>3.</p> $1 + 4 = \underline{\quad}$   | <p>4.</p> $3 + 5 = \underline{\quad}$   |
| <p>5.</p> $5 + 3 = \underline{\quad}$  | <p>6.</p> $1 + 1 = \underline{\quad}$  |
| <p>7.</p> $1 + 6 = \underline{\quad}$  | <p>8.</p> $3 + 3 = \underline{\quad}$  |

★ You can make up your own addition problems on the back of this page. You can make up your own shapes too. Don't forget to color them in!