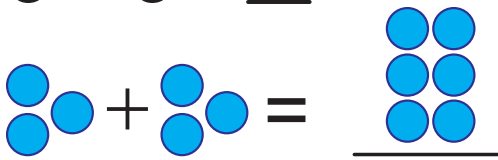









Practice Your Addition, 1 to 10 - Grid #18

★ Add the two numbers together for each problem. Write your answer in the blank space. Then add up the shapes and draw the answer. See Example 1.

Example 1. $3 + 3 = \underline{6}$ 	2. $2 + 5 = \underline{\quad}$ 
3. $4 + 5 = \underline{\quad}$ 	4. $3 + 2 = \underline{\quad}$ 
5. $4 + 4 = \underline{\quad}$ 	6. $4 + 1 = \underline{\quad}$ 
7. $2 + 4 = \underline{\quad}$ 	8. $1 + 3 = \underline{\quad}$ 

★ You can make up your own addition problems on the back of this page. You can make up your own shapes too. Don't forget to color them in!