


6
+ 2
3


Addition: Count and Add

Count the items in each row. Then add each row together.
Write the number to show how many there are.




$3 + 3 =$

- - - -



$4 + 3 =$

- - - -




$2 + 1 =$

- - - -




$3 + 2 =$

- - - -



$4 + 4 =$

- - - -



$2 + 2 =$

- - - -
