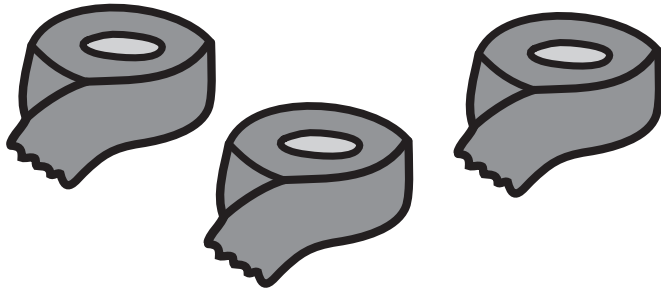


# Math Subtraction

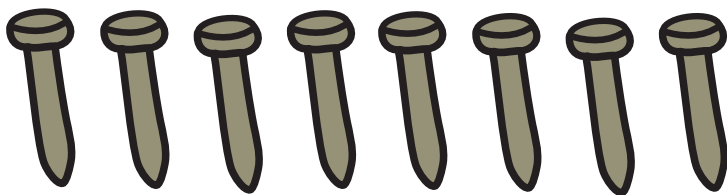
Count the tools. Then cross out the number of tools to subtract them. Write your answer in the box.




$$3 - 1 =$$



$$6 - 3 =$$



$$8 - 2 =$$



$$4 - 4 =$$