


Name: _____


Date: _____

Compose Within 20


Complete the number bonds and number sentences. The first one is done for you.




$$10 + 2 = \underline{12}$$




$$6 + 4 = \underline{\quad}$$




$$17 + 3 = \underline{\quad}$$




$$7 + 5 = \underline{\quad}$$




$$8 + 9 = \underline{\quad}$$




$$13 + 2 = \underline{\quad}$$




$$8 + 7 = \underline{\quad}$$




$$15 + 4 = \underline{\quad}$$




$$7 + 7 = \underline{\quad}$$



$$13 + 5 = \underline{\quad}$$



$$6 + 9 = \underline{\quad}$$




$$9 + 9 = \underline{\quad}$$

Name: _____


Date: _____

Decompose Within 20


Complete the number bonds and number sentences. The first one is done for you.




$$\underline{10} + \underline{9} = 19$$




$$\underline{\quad} + \underline{\quad} = 15$$




$$\underline{\quad} + \underline{\quad} = 11$$




$$\underline{\quad} + \underline{\quad} = 9$$




$$\underline{\quad} + \underline{\quad} = 13$$




$$\underline{\quad} + \underline{\quad} = 10$$




$$\underline{\quad} + \underline{\quad} = 17$$




$$\underline{\quad} + \underline{\quad} = 8$$




$$\underline{\quad} + \underline{\quad} = 12$$



$$\underline{\quad} + \underline{\quad} = 16$$



$$\underline{\quad} + \underline{\quad} = 14$$



$$\underline{\quad} + \underline{\quad} = 20$$