
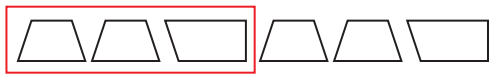



Complete the Trapezoid Pattern

<p>A trapezoid is a four-sided shape that has a pair of parallel sides.</p> 	<p>Repeated patterns have a part or whole that repeats over and over.</p>	<p>Notice the repeated pattern.</p> 	<p>What's the next shape in the pattern?</p> 
--	--	--	--

Directions: Look at the patterns and circle the repeated pattern. Then, continue the pattern.

1. 

2. 

3. 

4. 