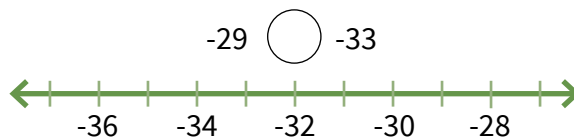
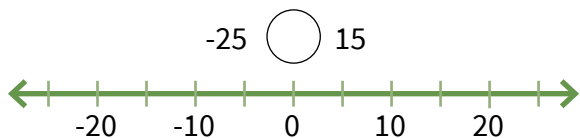
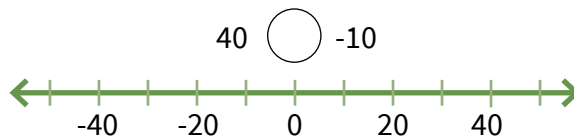
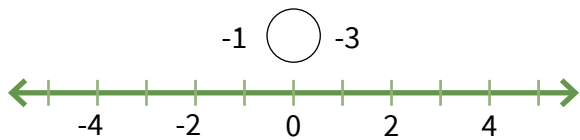


**PART
2**

Compare and Order Integers

Plot the integers on the number line. Then compare the integers using $<$ or $>$.



Compare the integers using $<$ or $>$.

130 ○ -310

-32 ○ -25

123 ○ -79

-26 ○ -24

12 ○ -15

-142 ○ -165

-201 ○ -216

-143 ○ 129

-489 ○ -498

Write the integers in order from least to greatest.

23, -25, 24 _____

-52, 48, -53 _____

113, -141, 109, -122 _____

-167, -85, 181, -164 _____

-242, -244, -248, -245 _____

