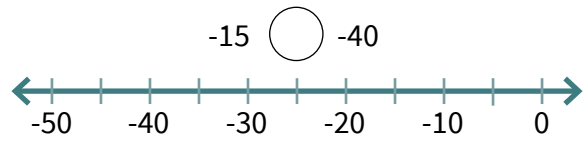
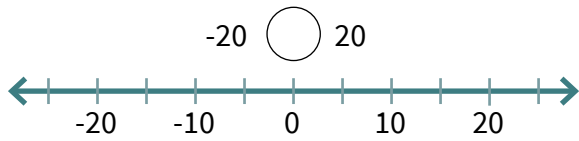
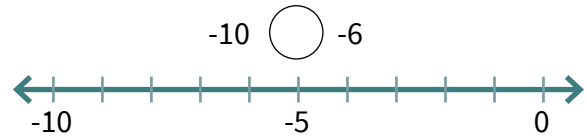
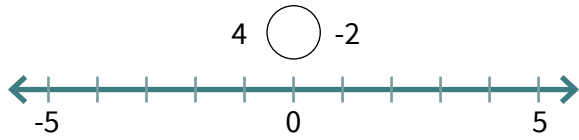


# Compare and Order Integers

Plot the integers on the number line. Then compare the integers using  $<$  or  $>$ .



Compare the integers using  $<$  or  $>$ .

134 ○ 143

47 ○ -50

-16 ○ -11

71 ○ -67


2 ○ -17

-3 ○ 0

-100 ○ 99

-14 ○ -5

-19 ○ -20



Write the integers in order from least to greatest.

10, 2, -9 \_\_\_\_\_

-7, 8, -2 \_\_\_\_\_

-15, -29, -22 \_\_\_\_\_

-11, 10, 7, -3 \_\_\_\_\_

14, 31, -19, -16 \_\_\_\_\_