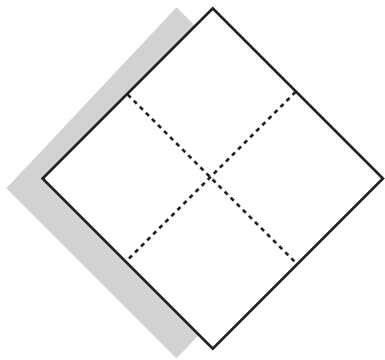
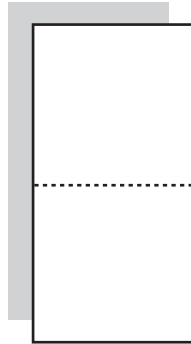


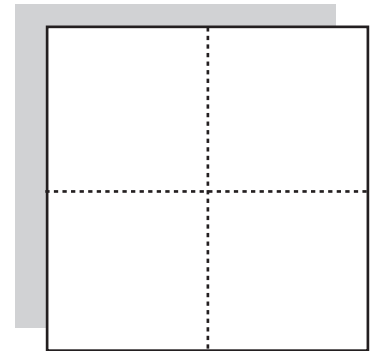
Color The Shapes



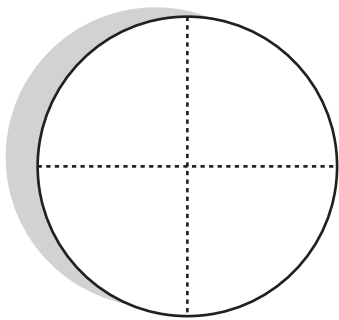
Color $\frac{1}{4}$ of this diamond **blue**.




Color $\frac{1}{2}$ of this rectangle **orange**.




Color $\frac{3}{4}$ of this square **red**.




Color $\frac{1}{2}$ of this circle **pink**.



Color $\frac{4}{6}$ of this rectangle **purple**.



Color $\frac{5}{8}$ of this rectangle **green**.



Color $\frac{2}{16}$ of this rectangle **green**. • Color $\frac{1}{16}$ of this rectangle **orange**.

Color $\frac{5}{16}$ of this rectangle **red**. • Color $\frac{4}{16}$ of this rectangle **purple**.

Color $\frac{3}{16}$ of this rectangle **blue**. • What fraction of the rectangle is left white?