


# Characteristics of Cones


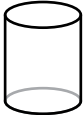
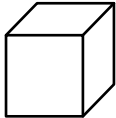

A **cone** is a round 3-dimensional shape that:

- has a circular base, or bottom
- comes to a point at the top



## Part 1 - Is it a Cone?

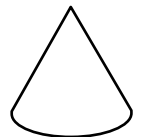
**Directions:** Look at the shapes and decide whether or not each is a cone. Then explain how you know. Be sure to mention the characteristics!

Shape	Is it a cone?	Explanation
		
		
		
		

## Part 2 - Compare Shapes

**Directions:** Compare the shapes and answer the questions that follow.

What do the two shapes have in common? What is different about the two shapes?




---



---



---



---