


# CATCH THOSE COINS!




#8

These coins are off and rolling!  
Catch all of the **QUARTERS** by  
drawing a **CIRCLE** around them.




Next, catch all of the **DIMES**  
by drawing a **SQUARE**  
around them.



**GREAT JOB** so far!  
Now catch all of the **NICKELS**  
by drawing a **TRIANGLE**  
around them.

Finally,  
catch all of the  
**PENNIES** by drawing an  
"X" over them.



How many of each coin did you catch?

Quarters \_\_\_\_\_ Dimes \_\_\_\_\_ Nickels \_\_\_\_\_ Pennies \_\_\_\_\_