

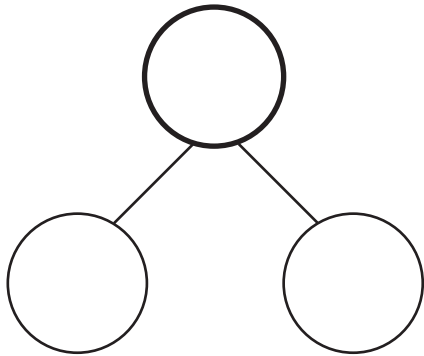
Name: _____

Date: _____

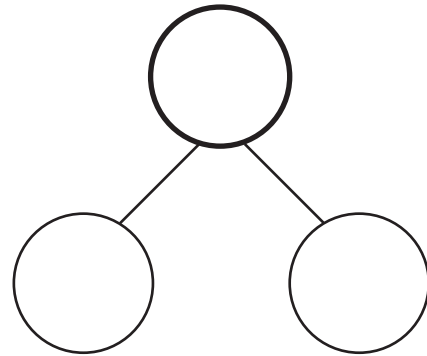
Build Your Own Number Bond

Use number bonds to solve these equations. Fill in the numbers you know and figure out the missing numbers by solving the problems.

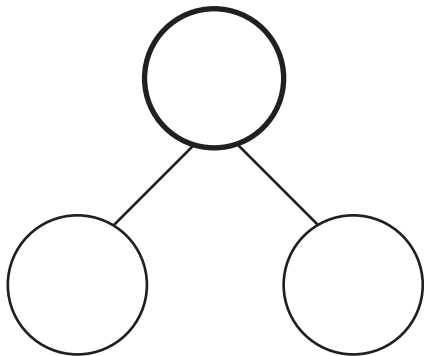
1. $9 + 1 =$ _____



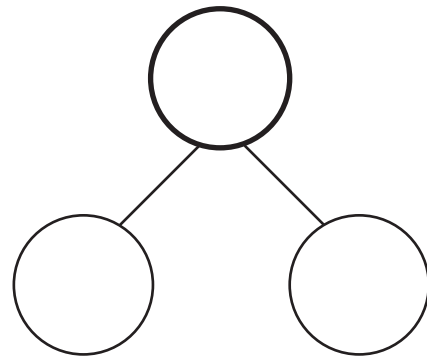
2. $4 + 4 =$ _____



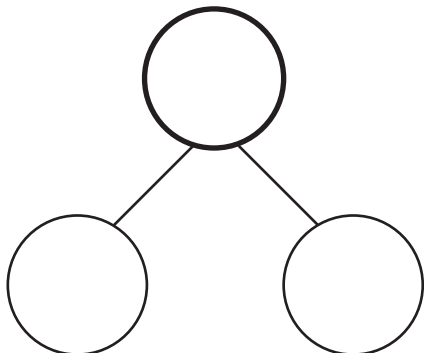
3. $5 + 3 =$ _____



4. $1 + 5 =$ _____



5. $5 + 5 =$ _____



6. $2 + 3 =$ _____

