



Subtraction is Tweet!


Count how many birds are in each box, then subtract the darker birds. Write your answer in the box on the right.




$$\begin{array}{r} 6 \\ - 3 \\ \hline \end{array}$$



$$\begin{array}{r} 4 \\ - 3 \\ \hline \end{array}$$



$$\begin{array}{r} 5 \\ - 2 \\ \hline \end{array}$$



$$\begin{array}{r} 6 \\ - 1 \\ \hline \end{array}$$