



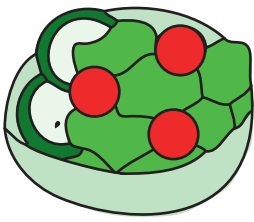
Guessing Practice

Playing guessing games will help your child start to learn how to make educated guesses and use process of elimination in a test-taking setting.



This practice quiz will ask basic questions that can be answered by process of elimination. There are three answer choices that are clearly not correct, and one that is probably correct.




1. Which food is best for a healthy lunch?



2. Which animal can be found on a farm?



3. Which tool would work best for hitting nails?



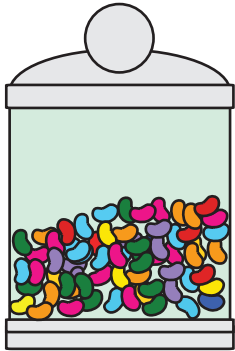
Guessing Practice

Playing guessing games will help your child start to learn how to make educated guesses and use process of elimination in a test-taking setting.

Some test questions will be too challenging. But even if you don't know the answer, there are ways to make an educated guess. Each question below is probably one that you don't know the answer to. However, each set of answers has three choices that are clearly not correct. Identify those three, and then find your answer!



1. How many jelly beans are inside the jar?



2

A

9

B


289

C


90,294

D


2. Which dinosaur is an Ankylosaurus?




A



B




C




D


3. Which shape is a scalene triangle?



A



B



C



D


Guessing Practice

Playing guessing games will help your child start to learn how to make educated guesses and use process of elimination in a test-taking setting.

Some test questions will be too challenging. But even if you don't know the answer, there are ways to make an educated guess. Each question below is probably one that you don't know the answer to. However, each set of answers has three choices that are clearly not correct. Identify those three, and then find your answer!



1. What do you need to play Lacrosse?




A



B




C




D


2. Which sea creature is an Isopod?



B




C




D


3. Which shape is a parallelogram?



A



B



C



D