





# BASKETBALL DIVISION #5

Ready to take the court and run a fast break to learning? Solve the following division problems and you'll be an All-Star!

★ ☆ ★  
 $10 \div 1 = \underline{\quad}$




★ ☆ ★  
 $15 \div 3 = \underline{\quad}$




★ ☆ ★  
 $6 \div 2 = \underline{\quad}$




★ ☆ ★  
 $32 \div 8 = \underline{\quad}$




★ ☆ ★  
 $18 \div 9 = \underline{\quad}$




★ ☆ ★  
 $24 \div 4 = \underline{\quad}$




★ ☆ ★  
 $16 \div 8 = \underline{\quad}$



★ ☆ ★  
 $14 \div 2 = \underline{\quad}$




★ ☆ ★  
 $33 \div 3 = \underline{\quad}$



★ ☆ ★  
 $8 \div 2 = \underline{\quad}$



★ ☆ ★  
 $12 \div 6 = \underline{\quad}$



★ ☆ ★  
 $45 \div 5 = \underline{\quad}$

