




# BASKETBALL DIVISION #4

Ready to take the court and run a fast break to learning? Solve the following division problems and you'll be an All-Star!


★ ☆ ★  
 $6 \div 3 = \underline{\quad}$




★ ☆ ★  
 $16 \div 4 = \underline{\quad}$




★ ☆ ★  
 $30 \div 3 = \underline{\quad}$




★ ☆ ★  
 $12 \div 6 = \underline{\quad}$




★ ☆ ★  
 $22 \div 2 = \underline{\quad}$




★ ☆ ★  
 $14 \div 7 = \underline{\quad}$




★ ☆ ★  
 $49 \div 7 = \underline{\quad}$



★ ☆ ★  
 $35 \div 7 = \underline{\quad}$




★ ☆ ★  
 $12 \div 4 = \underline{\quad}$



★ ☆ ★  
 $4 \div 2 = \underline{\quad}$



★ ☆ ★  
 $10 \div 5 = \underline{\quad}$



★ ☆ ★  
 $8 \div 2 = \underline{\quad}$

