




BASKETBALL DIVISION #3

Ready to take the court and run a fast break to learning? Solve the following division problems and you'll be an All-Star!


★ ☆ ★
 $9 \div 3 = \underline{\quad}$




★ ☆ ★
 $16 \div 8 = \underline{\quad}$




★ ☆ ★
 $36 \div 6 = \underline{\quad}$




★ ☆ ★
 $10 \div 2 = \underline{\quad}$




★ ☆ ★
 $36 \div 9 = \underline{\quad}$




★ ☆ ★
 $20 \div 4 = \underline{\quad}$




★ ☆ ★
 $18 \div 6 = \underline{\quad}$



★ ☆ ★
 $42 \div 7 = \underline{\quad}$




★ ☆ ★
 $24 \div 8 = \underline{\quad}$



★ ☆ ★
 $8 \div 4 = \underline{\quad}$



★ ☆ ★
 $40 \div 4 = \underline{\quad}$



★ ☆ ★
 $7 \div 1 = \underline{\quad}$

