






# Place Value Math

Write the place value for each numeral as shown below.

	Hundreds	Tens	Ones
578	500	70	8
124			
942			
776			
295			
454			

Draw a line to match the number on the fish to the words.

	2 hundreds, 2 tens and 5 ones
	6 hundreds, 2 tens and 3 ones
	4 hundreds, 3 tens and 7 ones
	9 hundreds, 5 tens and 2 ones
	1 hundred, 8 tens and 4 ones