






# ICE CREAM FOR SALE! #6




Sam, Kate and Becky are selling ice cream cones.

Use the chart below to graph the sales and answer the questions.

Number of  
Ice Cream Cones Sold

 Sam	3
 Kate	4
 Becky	2



1. Who sold the most ice cream? \_\_\_\_\_

2. Who sold the least ice cream? \_\_\_\_\_

3. How many more ice cream cones did Kate sell than Sam?

\_\_\_\_\_

4. How many ice cream cones were sold in all? \_\_\_\_\_

5. Kate's friend Diana sold 3 less ice cream cones than Kate.

How many ice cream cones did Diana sell? Show it on the graph.

\_\_\_\_\_