






# ICE CREAM FOR SALE! #4




Sam, Kate and Becky are selling ice cream cones.

Use the chart below to graph the sales and answer the questions.

Number of  
Ice Cream Cones Sold

 Sam	5
 Kate	2
 Becky	3



- Who sold the most ice cream? \_\_\_\_\_
- Who sold the least ice cream? \_\_\_\_\_
- How many more ice cream cones did Sam sell than Becky?  
\_\_\_\_\_
- How many ice cream cones were sold in all? \_\_\_\_\_
- Becky's friend Tammy sold one less ice cream cone than Becky.  
How many ice cream cones did Tammy sell? Show it on the graph.  
\_\_\_\_\_