






# ICE CREAM FOR SALE! #3




Sam, Kate and Becky are selling ice cream cones.

Use the chart below to graph the sales and answer the questions.

Number of  
Ice Cream Cones Sold

 Sam	1
 Kate	3
 Becky	6



- Who sold the most ice cream? \_\_\_\_\_
- Who sold the least ice cream? \_\_\_\_\_
- How many more ice cream cones did Becky sell than Kate?  
\_\_\_\_\_
- How many ice cream cones were sold in all? \_\_\_\_\_
- Sam's friend Dean sold 4 more ice cream cones than Sam.  
How many ice cream cones did Dean sell? Show it on the graph.  
\_\_\_\_\_