






# ICE CREAM FOR SALE! #2




Sam, Kate and Becky are selling ice cream cones.

Use the chart below to graph the sales and answer the questions.

Number of  
Ice Cream Cones Sold

 Sam	2
 Kate	1
 Becky	5



- Who sold the most ice cream? \_\_\_\_\_
- Who sold the least ice cream? \_\_\_\_\_
- How many more ice cream cones did Sam sell than Kate?  
\_\_\_\_\_
- How many ice cream cones were sold in all? \_\_\_\_\_
- Becky's friend Monica sold 2 less ice cream cones than Becky.  
How many ice cream cones did Monica sell? Show it on the graph.  
\_\_\_\_\_