






# ICE CREAM FOR SALE! #13

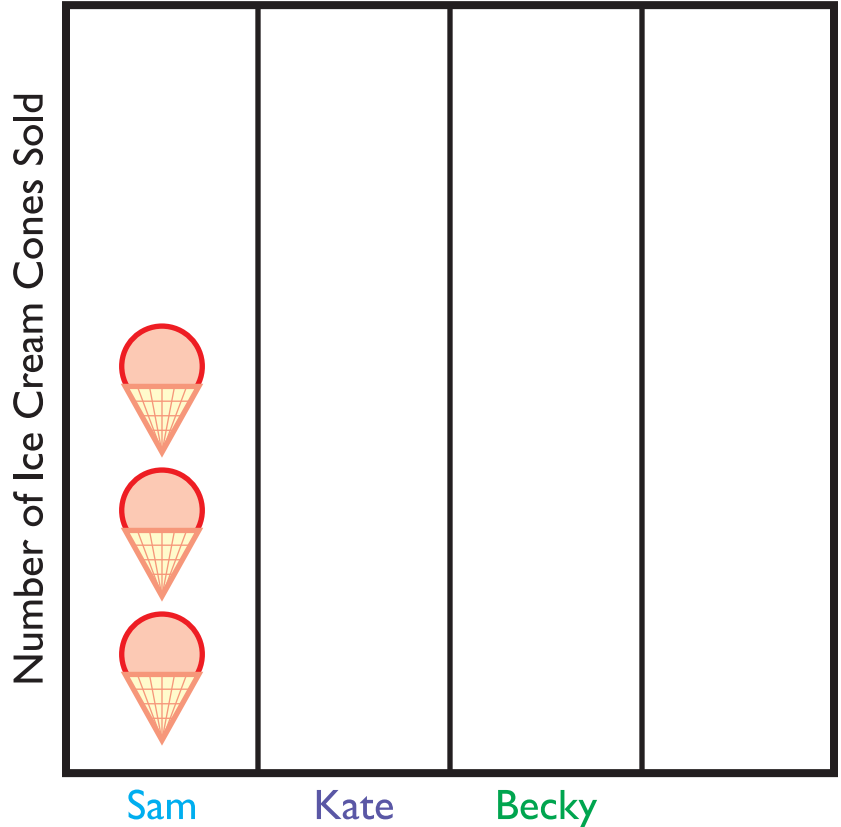


Sam, Kate and Becky are selling ice cream cones.

Use the chart below to complete the graph and answer the questions.

Number of Ice Cream Cones Sold

 Sam	3
 Kate	5
 Becky	2



1. Who sold the most ice cream?

\_\_\_\_\_

2. Who sold the least ice cream? \_\_\_\_\_

3. How many more ice cream cones did Kate sell than Sam?

\_\_\_\_\_

4. How many ice cream cones were sold in all? \_\_\_\_\_

5. Sam's friend Peter sold one more ice cream cone than Sam.  
How many ice cream cones did Peter sell? Draw it on the graph.

\_\_\_\_\_