


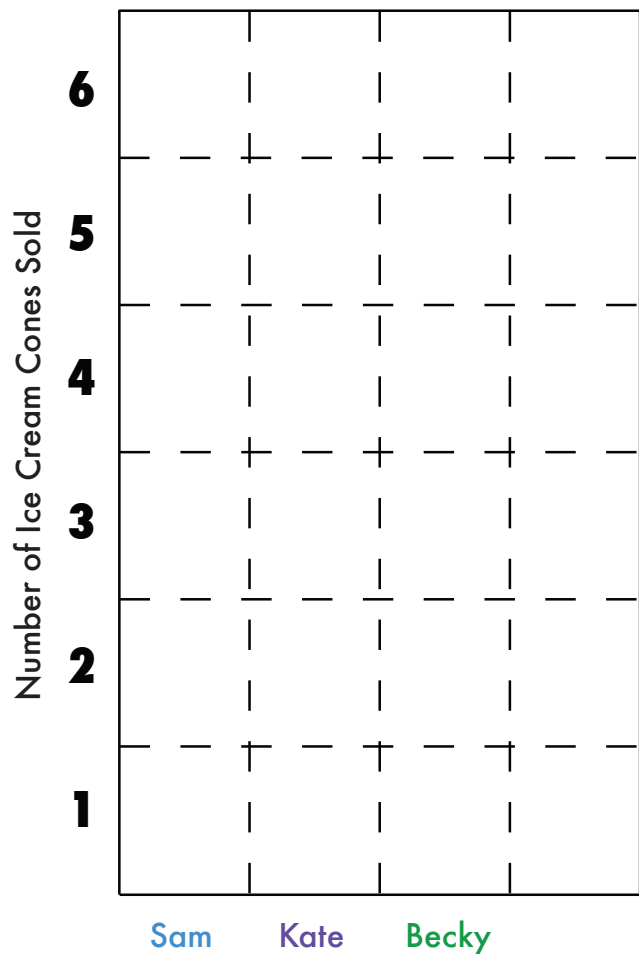


# Ice Cream for Sale!

Use the chart below to color in the graph showing each child's ice cream cone sales. Use **blue** for Sam, **purple** for Kate, and **green** for Becky.

Number of Ice Cream Cones Sold

 Sam	<b>4</b>
 Kate	<b>6</b>
 Becky	<b>3</b>



1. Who sold the most ice cream?

---

---

---

# Ice Cream for Sale!

2. Who sold the least ice cream?

---

---

---

3. How many more ice cream cones did Kate sell than Becky?

---

---

---

4. How many ice cream cones were sold in all?

---

---

---

5. Sam's friend Jason sold one more ice cream cone than Sam. How many ice cream cones did Jason sell?

---

---

---

Now use a new color to add Jason's data to the graph above. Don't forget to label Jason's data by adding his name under the graph.

