

Name _____

Name _____

Area of Rectangular Rooms

Area is the measurement of the square units inside a shape.

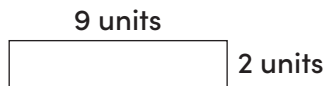
Use the equation to find area:

$$\text{Length} \times \text{Width} = \text{Area}$$

Directions: Calculate the area of the rooms below.
The first problem has been done for you!



Example:



Length: 9 units
Width: 2 units
Area: 18 square units

1. 10 units



Length: _____ units
Width: _____ units
Area: _____ square units

2.




Length: _____ units
Width: _____ units
Area: _____ square units

3. 3 units



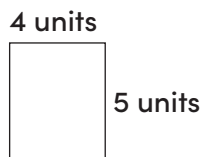
Length: _____ units
Width: _____ units
Area: _____ square units

4.



Length: _____ units
Width: _____ units
Area: _____ square units

5.



Length: _____ units
Width: _____ units
Area: _____ square units