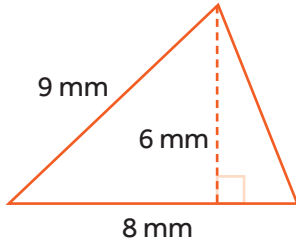


AREA OF A TRIANGLE #2

You can find the area of any triangle using the formula $A = \frac{1}{2}bh$, where b is the base of the triangle and h is the height of the triangle.

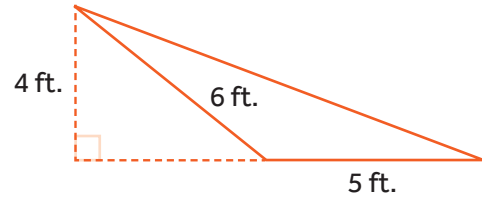
Try it! Find the area of each triangle.

1.



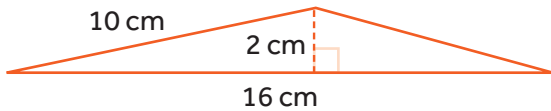
A = _____

2.



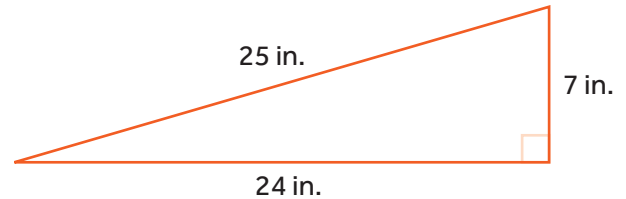
A = _____

3.



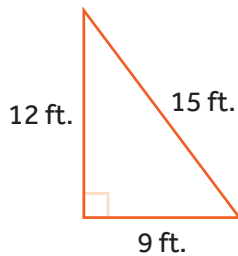
A = _____

4.



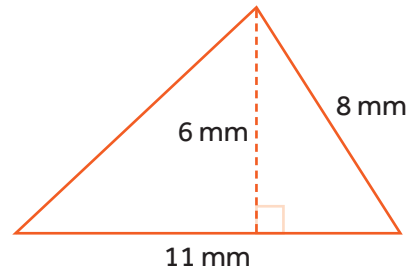
A = _____

5.



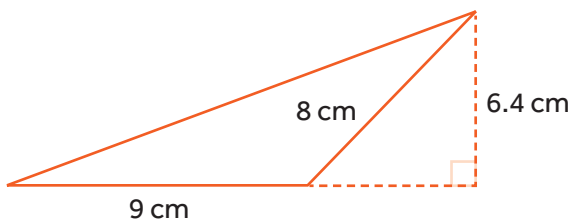
A = _____

6.



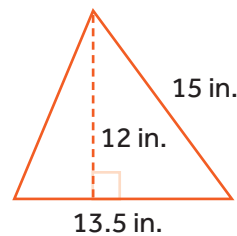
A = _____

7.



A = _____

8.



A = _____