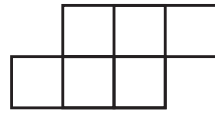


Area: Counting Unit Squares

Area is the measurement of the square units inside a shape. Each square inside the shape is 1 square unit.

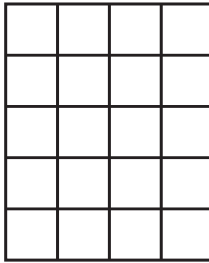


Area: 6 square units



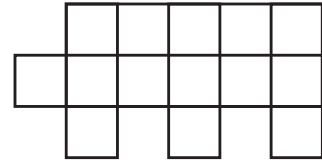
Directions: Find the area of the shape by counting the square units.

1.



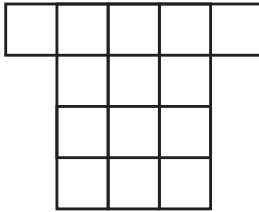
Area: _____ square units

2.



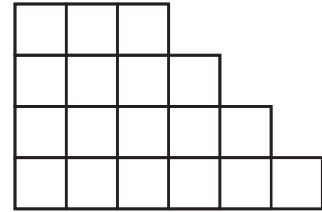
Area: _____ square units

3.




Area: _____ square units

4.




Area: _____ square units

5.



Area: _____ square units

6.




Area: _____ square units

Name: _____

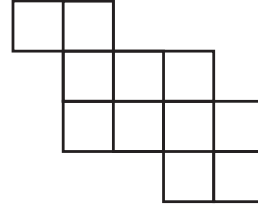
Date: _____

7.



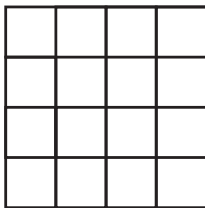
Area: _____ square units

8.




Area: _____ square units

9.



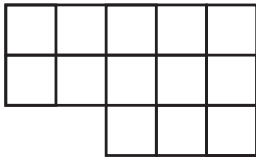
Area: _____ square units

10.



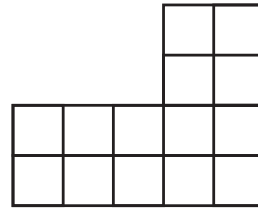
Area: _____ square units

11.



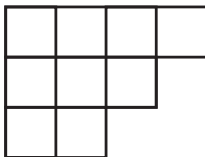
Area: _____ square units

12.



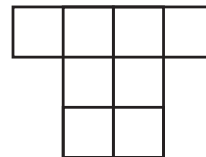
Area: _____ square units

13.



Area: _____ square units

14.



Area: _____ square units