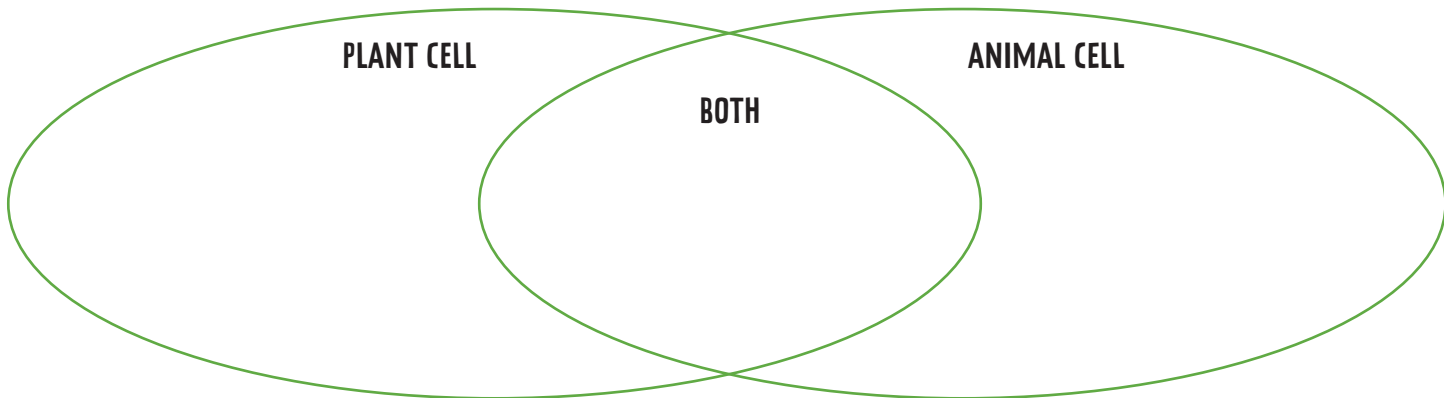


ANIMAL CELLS VS. PLANT CELLS

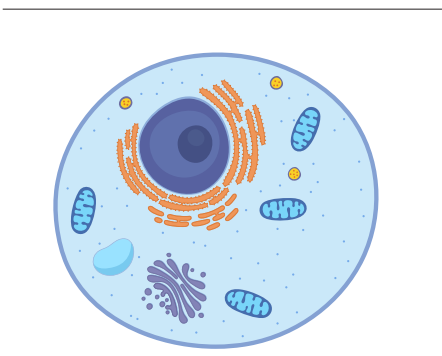
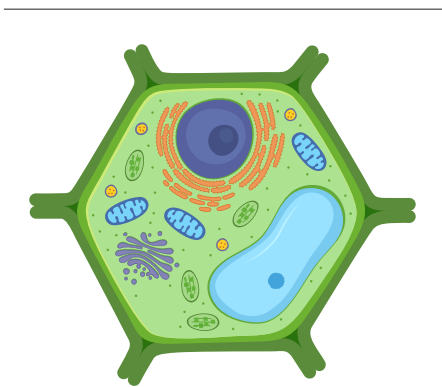
Show what you know about animal cells and plant cells by answering the questions below.

- Determine which organelles from the word bank are found in plant cells, which are found in animal cells, and which are found in both. Write each organelle name in the correct part of the Venn diagram.

WORD BANK					
nucleus	cell wall	cell membrane	large central vacuole	mitochondria	chloroplasts



- Which is a plant cell, and which is an animal cell? Label the diagrams below. Then explain your reasoning, giving at least two reasons for how you decided.



- Why are chloroplasts found in plant cells but not animal cells?
