


























Adding Cats & Dogs!



$\begin{array}{r} 4 \\ + 3 \\ \hline 7 \end{array}$  	$\begin{array}{r} 5 \\ + 1 \\ \hline \end{array}$  	$\begin{array}{r} 2 \\ + 2 \\ \hline \end{array}$  
$\begin{array}{r} 5 \\ + 3 \\ \hline \end{array}$  	$\begin{array}{r} 3 \\ + 2 \\ \hline \end{array}$  	$\begin{array}{r} 4 \\ + 0 \\ \hline \end{array}$ 

Find the missing number to complete the problem.

$\begin{array}{r} ? \\ + 1 \\ \hline 3 \end{array}$   <u>2</u>	$\begin{array}{r} 5 \\ + ? \\ \hline 9 \end{array}$   <u> </u>	$\begin{array}{r} 6 \\ + ? \\ \hline 9 \end{array}$   <u> </u>
$\begin{array}{r} 8 \\ + ? \\ \hline 10 \end{array}$   <u> </u>	$\begin{array}{r} 5 \\ + ? \\ \hline 8 \end{array}$   <u> </u>	$\begin{array}{r} 2 \\ + ? \\ \hline 7 \end{array}$   <u> </u>

Bonus: Add just the cats!



+

=

