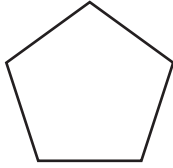


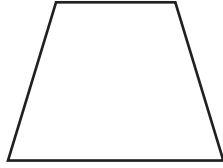
Name: _____

Date: _____

All Kinds of Polygons

Decide if each figure is a polygon. If it is, write the name on the line.

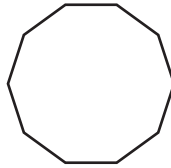


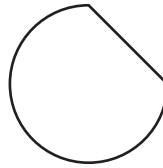


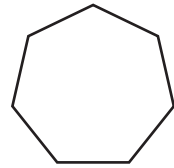












Draw two congruent polygons below.

Identify the points, lines, line segments, and rays.









Draw each of the polygons below.

a. Regular pentagon

b. Irregular hexagon

c. Regular octagon