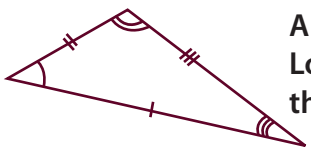
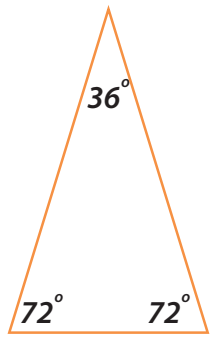
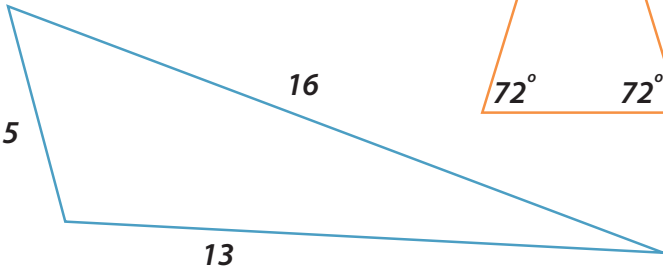
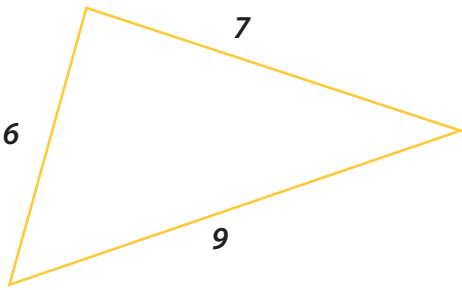
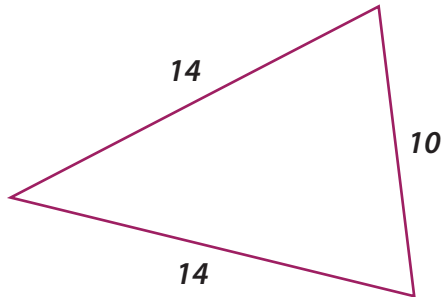
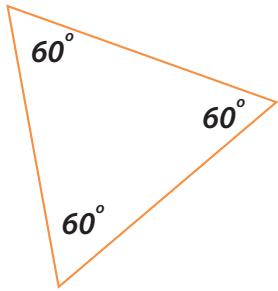
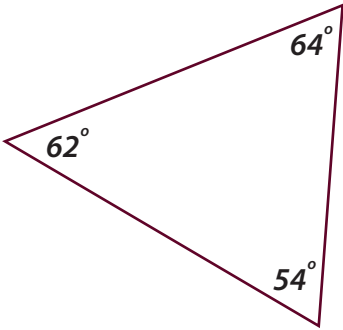


# All About Scalene Triangles



A scalene triangle has 3 sides that are unequal in length and 3 unequal angles. Look at the triangles below. Color the scalene triangles, then answer the questions.



1. Triangle BCD has 1 angle equal to 35 degrees, 1 angle equal to 45 degrees, and 1 angle equal to 90 degrees. Is it a scalene triangle? Circle yes or no.

Yes    No

2. Triangle QRS below is a scalene triangle. Its perimeter is 30 inches. Find the length of side RS.

